


1. Rechentabelle.

·	3	5	10
5			
50			
500			
5 000			

·	4	6	10
6			
60			
600			
6 000			



2. Multipliziere.

ZT	T	H	Z	E		
	2	1	8	3	·	3


ZT	T	H	Z	E		
	5	2	4	2	·	4

ZT	T	H	Z	E		
	3	3	1	5	·	5



3. Was stimmt? Kreuze an.


- $5 \cdot 869 = 6\ 360$
 $5 \cdot 1\ 312 = 6\ 560$
 $8 \cdot 2\ 352 = 18\ 816$



4. Rechentabelle.

:	2	5	10
60			
180			
360			
1 600			

:	2	3	6
36			
624			
954			
2 682			




5. Kreuze die Aufgaben ohne Rest an.

$8\,533 : 3$

$8\,520 : 6$

$10\,850 : 5$



6. Rechne.

ZT	T	H	Z	E										
4	1	2	4	8	:	4	=							

ZT	T	H	Z	E										
2	5	5	0	5	:	5	=							

