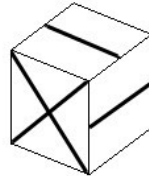
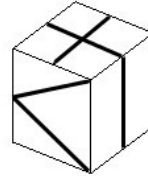
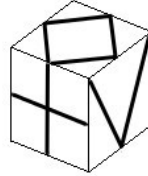
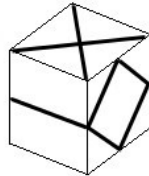
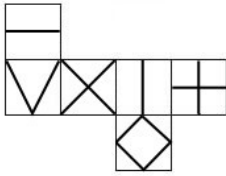


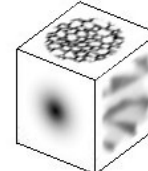



5 Raumvorstellung (Teil 1)

G5.01 Gegeben ist das Netz eines Würfels. Kreuze den einzigen dazu passenden Schrägriss des Würfels an!

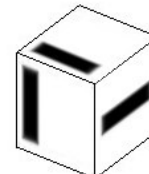
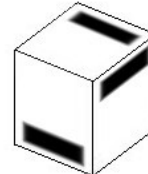
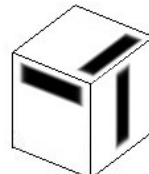
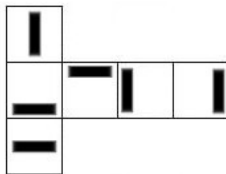
a)



b)




c)



G5.02 Was siehst du hier?

- einen Würfel von unten
- zwei Parallelogramme und ein Quadrat
- eine Ecke in einem Zimmer



G5.03 Was stimmt hier nicht?

