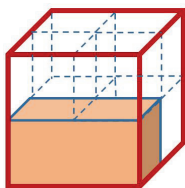
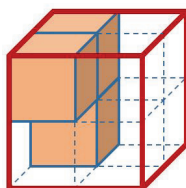


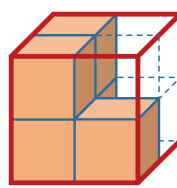
1. In den Zeichnungen sind Teile eines Würfels gefärbt. Gib jeweils an, welcher Bruchteil des Würfelvolumens gefärbt ist.



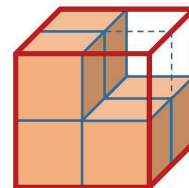
$\frac{1}{8}$



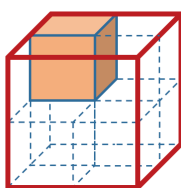
$\frac{2}{8}$



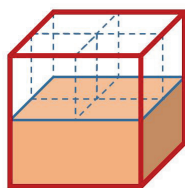
$\frac{3}{8}$



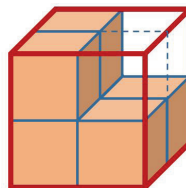
$\frac{4}{8}$



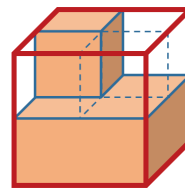
$\frac{1}{8}$



$\frac{2}{8}$



$\frac{3}{8}$



$\frac{3}{8}$

2. In den Zeichnungen sind Teile eines Zylinders gefärbt. Gib jeweils an, welcher Bruchteil des Gesamtkörpers gefärbt ist.



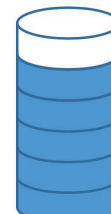
$\frac{1}{2}$



$\frac{1}{6}$



$\frac{3}{6}$



$\frac{4}{6}$



$\frac{1}{3}$



$\frac{2}{3}$



$\frac{4}{6}$



$\frac{3}{6}$

