

Our continent Europe


1. The table shows the 12 biggest capital cities of Europe. Complete the rest of the table. Use "unterwegs1" for help.

Capital city	Country	River that runs through the capital city
Moscow		
London		
Berlin		
Madrid		River Manzanares
Rome		
Kiev		
Paris		
Bucharest		Dâmbovița
Budapest		
Warsaw		
Minsk		Swislach
Vienna		

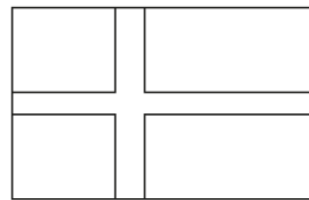
2. What colour are the flags of these European countries? Colour them with the correct colours. Use your atlas or the internet for help.




Croatia




Luxembourg



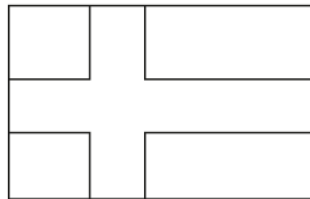
Denmark



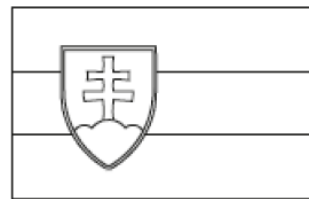
Lithuania



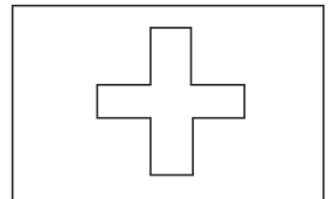
Malta




Finland



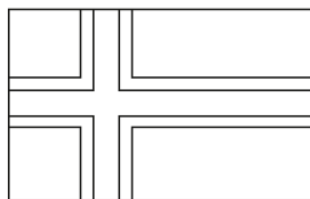
Slovakia



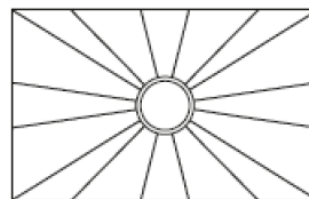
Switzerland




Portugal



Iceland



North Macedonia



Estonia

