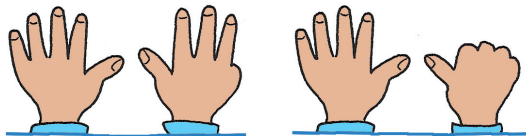


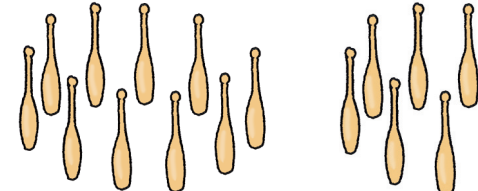


1 Finde die Minusaufgabe und rechne.

	
$9 - \underline{\quad} = 6$	$\underline{\quad} - \underline{\quad} = \underline{\quad}$
	
$\underline{\quad} - \underline{\quad} = \underline{\quad}$	$\underline{\quad} - \underline{\quad} = \underline{\quad}$

2 Rechne.



\_\_\_\_\_



\_\_\_\_\_




\_\_\_\_\_



\_\_\_\_\_



\_\_\_\_\_



\_\_\_\_\_

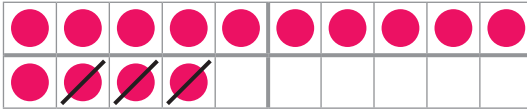


\_\_\_\_\_

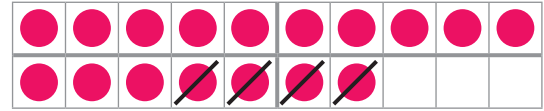


\_\_\_\_\_


**1** Rechne.



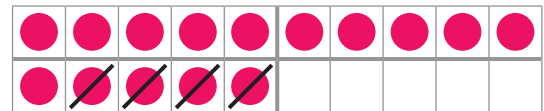
\_\_\_\_\_



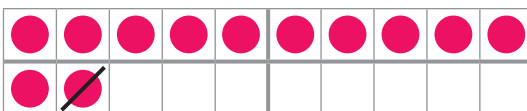
\_\_\_\_\_




\_\_\_\_\_



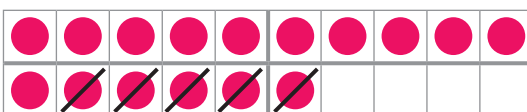
\_\_\_\_\_



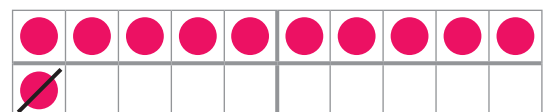
\_\_\_\_\_



\_\_\_\_\_



\_\_\_\_\_



\_\_\_\_\_

**2** Rechentabellen. Rechne.

-	6	3	1
9			
8			

-	4	3	2
10			
5			

-	5	2	1
12			
15			

-	6	3	1
19			
18			

-	4	3	2
20			
15			

-	3	2	1
12			
15			



### Förderblatt

Arbeiten mit Operationen

Subtraktion im Zahlenraum 20

Testen und Fördern

1 Rechne.

$$14 - 3 = 11$$

$$17 - 4 = 13$$

$$13 - 2 = 11$$

$$15 - 4 = 11$$

$$12 - 1 = 11$$

$$18 - 3 = 15$$

$$16 - 5 = 11$$

$$11 - 1 = 10$$

2 Rechentabellen. Rechne.

-	6	3	1	-	4	3	2	-	5	2	1
9	3	6	8	10	6	7	8	12	7	10	11
8	2	5	7	5	1	2	3	15	10	13	14

-	6	3	1	-	4	3	2	-	3	2	1
19	13	16	18	20	16	17	18	12	9	10	11
18	12	15	17	15	11	12	13	15	12	13	14

© Österreichischer Bundesverlag Schulbuch GmbH & Co. KG, Wien 2014. Alle Rechte vorbehalten. Testen und Fördern, MiniMax 1

27

### Förderblatt

Arbeiten mit Operationen

Subtraktion

Testen und Fördern

1 Finde die Minusaufgabe und rechne.

$9 - 3 = 6$	$10 - 3 = 7$	$10 - 4 = 6$
$5 - 1 = 4$		

2 Rechne.

$$3 - 1 = 2$$

$$7 - 5 = 2$$

$$6 - 2 = 4$$

$$9 - 3 = 6$$

$$5 - 4 = 1$$

$$6 - 4 = 2$$

$$8 - 5 = 3$$

$$4 - 2 = 2$$

© Österreichischer Bundesverlag Schulbuch GmbH & Co. KG, Wien 2014. Alle Rechte vorbehalten. Testen und Fördern, MiniMax 1


26

### Förderblatt

Subtraktion im Zahlenraum 20

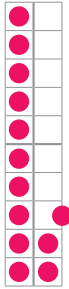
Arbeiten mit Operationen

1 Finde die Umkehraufgabe und rechne.




$$17 - 4 = 13$$

$$13 + 4 = 17$$




$$13 - 1 = 12$$

$$12 + 1 = 13$$




$$18 - 5 = 13$$

$$13 + 5 = 18$$



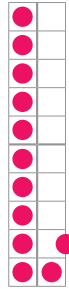
$$13 - 3 = 10$$

$$10 + 3 = 13$$




$$15 - 4 = 11$$

$$11 + 4 = 15$$




$$12 - 1 = 11$$

$$11 + 1 = 12$$



$$10 - 3 = 7$$

$$7 + 3 = 10$$



$$16 - 6 = 10$$

$$10 + 6 = 16$$