


1 Ordne die Längen den Bildern sinnvoll zu.

1)



..... ca. 3 m

2)



..... 18,6 m

3)



..... 850 km

4)



..... 62 cm


5)



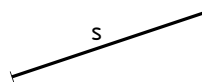
..... 4 mm

2 Miss die Strecke und gib ihre Länge in cm an.

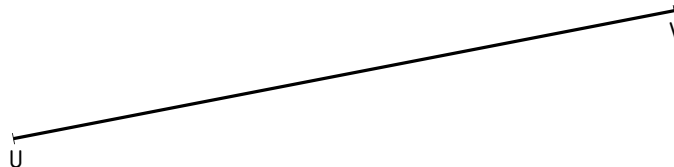
a) \overline{AB} =



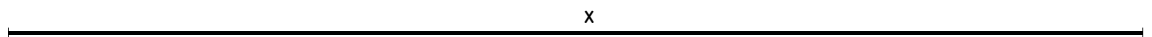
b) s =



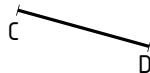
c) \overline{UV} =



d) x =



e) \overline{CD} =



3 Zeichne die gegebene Strecke und beschrifte sie.

a) \overline{AB} = 1 dm

b) r = 55 mm

c) \overline{XY} = 3,7 cm

d) s = 89 mm

e) x = 17 mm

f) c = 8 cm 2 mm

g) \overline{UV} = 2,1 cm

h) \overline{EF} = 13,9 cm

